

**EXAM 2**

**Art 290: Ancient Greek and Roman Art**

Fall 2022

10/17/2022

50 points total, 15% of final grade

*For each question, identify the artwork as indicated, then and give a brief (1-2 sentence) answer. Please be specific in your answers.*

- 1. Title \_\_\_\_\_
- Artist \_\_\_\_\_
- Period \_\_\_\_\_

What is the term for this figure's pose, with weight shifted to one leg? What is the visual impact of this pose? (4 points)

---

---

---

---

This sculptor wrote a treatise that specified a set of rules for constructing what he considered to be the ideal human figure was called

- A. the Doryphoros.
- B. the Canon.
- C. the Contrapposto.
- D. the Symmetria.

- 2. Title \_\_\_\_\_
- Artist \_\_\_\_\_
- Period \_\_\_\_\_

Describe the pose of this figure and compare with that of the sculpture in image 1. (6 points)

---

---

---

---

3. Title \_\_\_\_\_  
Artist(s) \_\_\_\_\_  
Period \_\_\_\_\_

How was this shape of vase used? (2 points)

---

---

What painting technique is used to decorate this vase? How are the interior details of figures rendered in this technique? (3 points)

---

---

---

4. Title \_\_\_\_\_  
Artist \_\_\_\_\_  
Period \_\_\_\_\_

How was this shape of vase used and in what specific context? (2 points)

---

---

What painting technique is used to decorate this vase? How does this technique differ from that used on the vase in image 3? (4 points)

---

---

---

---

5. Title \_\_\_\_\_  
Artist \_\_\_\_\_  
Period \_\_\_\_\_

What feature of this figure represents a significant departure from earlier traditions in Greek art?

---

---

Describe briefly how the sculpture came to be preserved today. [i.e., Who made this sculpture, when and where?] (4 points)

---

---

---

---

6. Title \_\_\_\_\_  
Period (of original) \_\_\_\_\_

Identify the figure indicated.

---

There were two main trends in visual art in this period. What trend does this work follow?

---

How are the style and composition of this piece representative of the period style? (4 points)

---


---

---


---

---


1)



2)



3)





4)



5)





6)

